

Escola: _____
Data: _____ Turma: _____ EducacaoeTransformacao.com.br
Aluno: _____

VEJA O MODELO E CONTINUE ...

$$9 - 4 = 5$$




A) $8 - 3 =$

B) $7 - 2 =$

C) $6 - 5 =$

D) $5 - 1 =$

OBSERVE E RESPONDA:



A) QUANTAS BOLAS **TIAGO** TEM?

B) **BIANCA** PRECISA GANHAR QUANTAS BONECAS PARA FICAR COM A MESMA QUANTIDADE QUE **TIAGO**?

C) **RENÊ** TEM QUANTOS CARRINHOS?

D) QUANTOS CARRINHOS FALTAM PARA **RENÊ** FICAR COM A MESMA QUANTIDADE QUE **TIAGO**?

Escola: _____

Data: _____ Turma: _____ EducacaoeTransformacao.com.br

Aluno: _____

PINTA RESULTADO

- | | | | |
|---------|---------|-----------|------------|
| 1 Azul | 3 Rosa | 5 Roxo | 7 Verde |
| 2 Cinza | 4 Lilás | 6 Amarelo | 8 Vermelho |



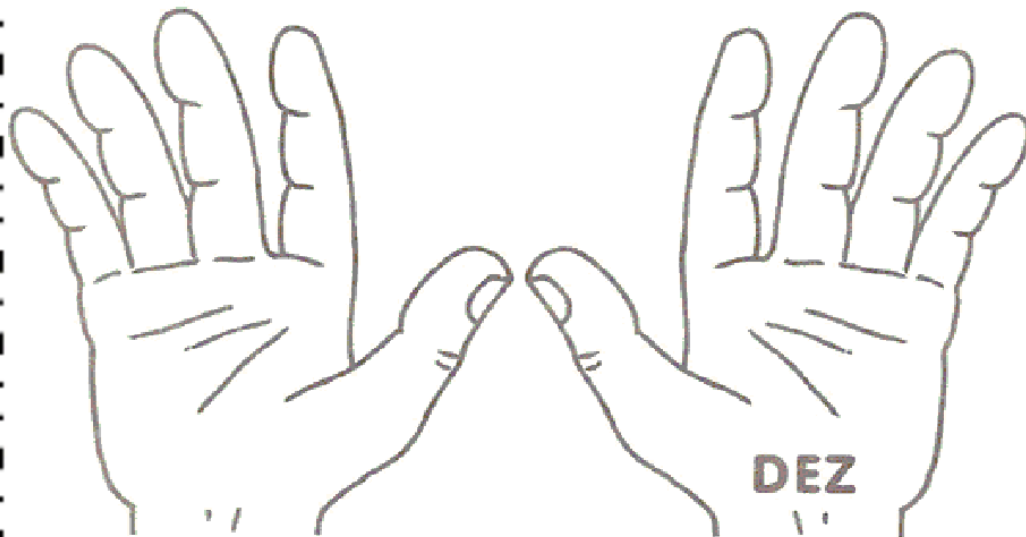
$\begin{array}{r} 9 \\ - 4 \\ \hline \end{array}$	$\begin{array}{r} 2 \\ - 1 \\ \hline \end{array}$	$\begin{array}{r} 8 \\ - 0 \\ \hline \end{array}$	$\begin{array}{r} 7 \\ - 0 \\ \hline \end{array}$		
$\begin{array}{r} 8 \\ - 1 \\ \hline \end{array}$	$\begin{array}{r} 6 \\ - 2 \\ \hline \end{array}$	$\begin{array}{r} 5 \\ - 3 \\ \hline \end{array}$	$\begin{array}{r} 8 \\ - 4 \\ \hline \end{array}$	$\begin{array}{r} 6 \\ - 3 \\ \hline \end{array}$	$\begin{array}{r} 5 \\ - 0 \\ \hline \end{array}$
$\begin{array}{r} 9 \\ - 1 \\ \hline \end{array}$	$\begin{array}{r} 8 \\ - 7 \\ \hline \end{array}$	$\begin{array}{r} 9 \\ - 3 \\ \hline \end{array}$	$\begin{array}{r} 7 \\ - 5 \\ \hline \end{array}$	$\begin{array}{r} 8 \\ - 2 \\ \hline \end{array}$	$\begin{array}{r} 9 \\ - 6 \\ \hline \end{array}$

Escola: _____

Data: _____ Turma: _____ EducacaoeTransformacao.com.br

Aluno: _____

QUANTOS DEDOS VOCÊ CONTOU?



10

10 - 10 - _____

10 - 10 - _____

DEZ - DEZ -

DEZ - -

Escola: _____

Data: _____ Turma: _____ EducacaoeTransformacao.com.br

Aluno: _____

$$\begin{array}{r} 13 \\ - 8 \\ \hline \end{array}$$

$$\begin{array}{r} 11 \\ - 2 \\ \hline \end{array}$$

$$\begin{array}{r} 11 \\ - 7 \\ \hline \end{array}$$

$$\begin{array}{r} 16 \\ - 9 \\ \hline \end{array}$$

$$\begin{array}{r} 13 \\ - 4 \\ \hline \end{array}$$

$$\begin{array}{r} 15 \\ - 8 \\ \hline \end{array}$$

$$\begin{array}{r} 14 \\ - 5 \\ \hline \end{array}$$

$$\begin{array}{r} 10 \\ - 7 \\ \hline \end{array}$$

$$\begin{array}{r} 10 \\ - 5 \\ \hline \end{array}$$

$$\begin{array}{r} 12 \\ - 9 \\ \hline \end{array}$$

$$\begin{array}{r} 14 \\ - 8 \\ \hline \end{array}$$

$$\begin{array}{r} 11 \\ - 3 \\ \hline \end{array}$$

$$\begin{array}{r} 18 \\ - 9 \\ \hline \end{array}$$

$$\begin{array}{r} 10 \\ - 2 \\ \hline \end{array}$$

$$\begin{array}{r} 10 \\ - 3 \\ \hline \end{array}$$

$$\begin{array}{r} 12 \\ - 4 \\ \hline \end{array}$$

$$\begin{array}{r} 17 \\ - 8 \\ \hline \end{array}$$

$$\begin{array}{r} 12 \\ - 5 \\ \hline \end{array}$$

$$\begin{array}{r} 14 \\ - 6 \\ \hline \end{array}$$

$$\begin{array}{r} 11 \\ - 4 \\ \hline \end{array}$$

$$\begin{array}{r} 11 \\ - 6 \\ \hline \end{array}$$

$$\begin{array}{r} 12 \\ - 5 \\ \hline \end{array}$$

$$\begin{array}{r} 12 \\ - 3 \\ \hline \end{array}$$

$$\begin{array}{r} 13 \\ - 6 \\ \hline \end{array}$$

$$\begin{array}{r} 14 \\ - 7 \\ \hline \end{array}$$

Escola: _____

Data: _____ Turma: _____ EducacaoeTransformacao.com.br

Aluno: _____

$$\begin{array}{r} 8 \\ - 4 \\ \hline \end{array}$$

$$\begin{array}{r} 13 \\ - 1 \\ \hline \end{array}$$

$$\begin{array}{r} 5 \\ - 5 \\ \hline \end{array}$$

$$\begin{array}{r} 13 \\ - 2 \\ \hline \end{array}$$

$$\begin{array}{r} 14 \\ - 4 \\ \hline \end{array}$$

$$\begin{array}{r} 1 \\ - 0 \\ \hline \end{array}$$

$$\begin{array}{r} 12 \\ - 7 \\ \hline \end{array}$$

$$\begin{array}{r} 7 \\ - 6 \\ \hline \end{array}$$

$$\begin{array}{r} 4 \\ - 2 \\ \hline \end{array}$$

$$\begin{array}{r} 11 \\ - 9 \\ \hline \end{array}$$

$$\begin{array}{r} 7 \\ - 7 \\ \hline \end{array}$$

$$\begin{array}{r} 2 \\ - 1 \\ \hline \end{array}$$

Escola: _____

Data: _____ Turma: _____ EducacaoeTransformacao.com.br

Aluno: _____

Resolva as operações:

$$\begin{array}{r} 50 \\ -32 \\ \hline \end{array}$$

$$\begin{array}{r} 38 \\ -35 \\ \hline \end{array}$$

$$\begin{array}{r} 11 \\ - 5 \\ \hline \end{array}$$

$$\begin{array}{r} 24 \\ -10 \\ \hline \end{array}$$

$$\begin{array}{r} 50 \\ -45 \\ \hline \end{array}$$

$$\begin{array}{r} 43 \\ -13 \\ \hline \end{array}$$

$$\begin{array}{r} 41 \\ -22 \\ \hline \end{array}$$

$$\begin{array}{r} 42 \\ -30 \\ \hline \end{array}$$

$$\begin{array}{r} 37 \\ -19 \\ \hline \end{array}$$

$$\begin{array}{r} 69 \\ -29 \\ \hline \end{array}$$

$$\begin{array}{r} 36 \\ -18 \\ \hline \end{array}$$

$$\begin{array}{r} 72 \\ -53 \\ \hline \end{array}$$

$$\begin{array}{r} 47 \\ -44 \\ \hline \end{array}$$

$$\begin{array}{r} 25 \\ - 7 \\ \hline \end{array}$$

$$\begin{array}{r} 70 \\ -16 \\ \hline \end{array}$$

$$\begin{array}{r} 25 \\ - 6 \\ \hline \end{array}$$

$$\begin{array}{r} 51 \\ -14 \\ \hline \end{array}$$

$$\begin{array}{r} 86 \\ -50 \\ \hline \end{array}$$

$$\begin{array}{r} 23 \\ - 9 \\ \hline \end{array}$$

$$\begin{array}{r} 94 \\ -94 \\ \hline \end{array}$$

$$\begin{array}{r} 67 \\ -25 \\ \hline \end{array}$$

$$\begin{array}{r} 88 \\ -19 \\ \hline \end{array}$$

$$\begin{array}{r} 91 \\ -37 \\ \hline \end{array}$$

$$\begin{array}{r} 10 \\ - 2 \\ \hline \end{array}$$

$$\begin{array}{r} 39 \\ -30 \\ \hline \end{array}$$

Escola: _____

Data: _____ Turma: _____ EducacaoeTransformacao.com.br

Aluno: _____

$$\begin{array}{r} 908 \\ - 95 \\ \hline \end{array}$$

$$\begin{array}{r} 265 \\ - 214 \\ \hline \end{array}$$

$$\begin{array}{r} 722 \\ - 619 \\ \hline \end{array}$$

$$\begin{array}{r} 662 \\ - 508 \\ \hline \end{array}$$

$$\begin{array}{r} 512 \\ - 47 \\ \hline \end{array}$$

$$\begin{array}{r} 962 \\ - 456 \\ \hline \end{array}$$

$$\begin{array}{r} 630 \\ - 517 \\ \hline \end{array}$$

$$\begin{array}{r} 753 \\ - 41 \\ \hline \end{array}$$

$$\begin{array}{r} 276 \\ - 56 \\ \hline \end{array}$$

$$\begin{array}{r} 807 \\ - 10 \\ \hline \end{array}$$

$$\begin{array}{r} 492 \\ - 95 \\ \hline \end{array}$$

$$\begin{array}{r} 852 \\ - 104 \\ \hline \end{array}$$

$$\begin{array}{r} 504 \\ - 107 \\ \hline \end{array}$$

$$\begin{array}{r} 321 \\ - 122 \\ \hline \end{array}$$

$$\begin{array}{r} 450 \\ - 130 \\ \hline \end{array}$$

$$\begin{array}{r} 412 \\ - 203 \\ \hline \end{array}$$

$$\begin{array}{r} 365 \\ - 75 \\ \hline \end{array}$$

$$\begin{array}{r} 670 \\ - 198 \\ \hline \end{array}$$

$$\begin{array}{r} 513 \\ - 200 \\ \hline \end{array}$$

$$\begin{array}{r} 609 \\ - 424 \\ \hline \end{array}$$

Escola: _____

Data: _____ Turma: _____ EducacaoeTransformacao.com.br

Aluno: _____

$$\begin{array}{r} 200 \\ - 198 \\ \hline \end{array} \quad \begin{array}{r} 200 \\ - 145 \\ \hline \end{array} \quad \begin{array}{r} 200 \\ - 132 \\ \hline \end{array} \quad \begin{array}{r} 200 \\ - 187 \\ \hline \end{array} \quad \begin{array}{r} 200 \\ - 164 \\ \hline \end{array}$$

$$\begin{array}{r} 300 \\ - 198 \\ \hline \end{array} \quad \begin{array}{r} 300 \\ - 145 \\ \hline \end{array} \quad \begin{array}{r} 300 \\ - 132 \\ \hline \end{array} \quad \begin{array}{r} 300 \\ - 187 \\ \hline \end{array} \quad \begin{array}{r} 300 \\ - 164 \\ \hline \end{array}$$

$$\begin{array}{r} 400 \\ - 198 \\ \hline \end{array} \quad \begin{array}{r} 400 \\ - 145 \\ \hline \end{array} \quad \begin{array}{r} 400 \\ - 132 \\ \hline \end{array} \quad \begin{array}{r} 400 \\ - 187 \\ \hline \end{array} \quad \begin{array}{r} 400 \\ - 164 \\ \hline \end{array}$$

$$\begin{array}{r} 500 \\ - 198 \\ \hline \end{array} \quad \begin{array}{r} 500 \\ - 145 \\ \hline \end{array} \quad \begin{array}{r} 500 \\ - 132 \\ \hline \end{array}$$

$$\begin{array}{r} 600 \\ - 198 \\ \hline \end{array} \quad \begin{array}{r} 600 \\ - 145 \\ \hline \end{array} \quad \begin{array}{r} 600 \\ - 132 \\ \hline \end{array}$$

$$\begin{array}{r} 700 \\ - 198 \\ \hline \end{array} \quad \begin{array}{r} 700 \\ - 145 \\ \hline \end{array} \quad \begin{array}{r} 700 \\ - 132 \\ \hline \end{array}$$



Escola: _____

Data: _____ Turma: _____ EducacaoeTransformacao.com.br

Aluno: _____

$$\begin{array}{r} 724 \\ -612 \\ \hline \end{array}$$

$$\begin{array}{r} 525 \\ -160 \\ \hline \end{array}$$

$$\begin{array}{r} 409 \\ -143 \\ \hline \end{array}$$

$$\begin{array}{r} 964 \\ -791 \\ \hline \end{array}$$

$$\begin{array}{r} 610 \\ -13 \\ \hline \end{array}$$

$$\begin{array}{r} 850 \\ -124 \\ \hline \end{array}$$

$$\begin{array}{r} 502 \\ -101 \\ \hline \end{array}$$

$$\begin{array}{r} 430 \\ -260 \\ \hline \end{array}$$

$$\begin{array}{r} 514 \\ -190 \\ \hline \end{array}$$

$$\begin{array}{r} 690 \\ -532 \\ \hline \end{array}$$

$$\begin{array}{r} 263 \\ -46 \\ \hline \end{array}$$

$$\begin{array}{r} 725 \\ -11 \\ \hline \end{array}$$

$$\begin{array}{r} 906 \\ -104 \\ \hline \end{array}$$

$$\begin{array}{r} 820 \\ -160 \\ \hline \end{array}$$

$$\begin{array}{r} 450 \\ -141 \\ \hline \end{array}$$

$$\begin{array}{r} 125 \\ -82 \\ \hline \end{array}$$

$$\begin{array}{r} 367 \\ -308 \\ \hline \end{array}$$

$$\begin{array}{r} 657 \\ -552 \\ \hline \end{array}$$

$$\begin{array}{r} 640 \\ -92 \\ \hline \end{array}$$

$$\begin{array}{r} 705 \\ -83 \\ \hline \end{array}$$

Escola: _____

Data: _____ Turma: _____ EducacaoeTransformacao.com.br

Aluno: _____

$$\begin{array}{r} 508 \\ -218 \\ \hline \end{array}$$

$$\begin{array}{r} 520 \\ -417 \\ \hline \end{array}$$

$$\begin{array}{r} 523 \\ -108 \\ \hline \end{array}$$

$$\begin{array}{r} 841 \\ -121 \\ \hline \end{array}$$

$$\begin{array}{r} 254 \\ -213 \\ \hline \end{array}$$

$$\begin{array}{r} 930 \\ -526 \\ \hline \end{array}$$

$$\begin{array}{r} 481 \\ -90 \\ \hline \end{array}$$

$$\begin{array}{r} 910 \\ -615 \\ \hline \end{array}$$

$$\begin{array}{r} 732 \\ -419 \\ \hline \end{array}$$

$$\begin{array}{r} 621 \\ -202 \\ \hline \end{array}$$

$$\begin{array}{r} 328 \\ -129 \\ \hline \end{array}$$

$$\begin{array}{r} 459 \\ -151 \\ \hline \end{array}$$

$$\begin{array}{r} 804 \\ -624 \\ \hline \end{array}$$

$$\begin{array}{r} 790 \\ -284 \\ \hline \end{array}$$

$$\begin{array}{r} 973 \\ -57 \\ \hline \end{array}$$

$$\begin{array}{r} 490 \\ -430 \\ \hline \end{array}$$

$$\begin{array}{r} 376 \\ -109 \\ \hline \end{array}$$

$$\begin{array}{r} 277 \\ -16 \\ \hline \end{array}$$

$$\begin{array}{r} 402 \\ -88 \\ \hline \end{array}$$

$$\begin{array}{r} 631 \\ -133 \\ \hline \end{array}$$

Escola: _____

Data: _____ Turma: _____ EducacaoeTransformacao.com.br

Aluno: _____

$$\begin{array}{r} 488 \\ -154 \\ \hline \end{array}$$

$$\begin{array}{r} 707 \\ -56 \\ \hline \end{array}$$

$$\begin{array}{r} 966 \\ -349 \\ \hline \end{array}$$

$$\begin{array}{r} 710 \\ -543 \\ \hline \end{array}$$

$$\begin{array}{r} 261 \\ -63 \\ \hline \end{array}$$

$$\begin{array}{r} 409 \\ -108 \\ \hline \end{array}$$

$$\begin{array}{r} 638 \\ -151 \\ \hline \end{array}$$

$$\begin{array}{r} 410 \\ -302 \\ \hline \end{array}$$

$$\begin{array}{r} 840 \\ -451 \\ \hline \end{array}$$

$$\begin{array}{r} 523 \\ -217 \\ \hline \end{array}$$

$$\begin{array}{r} 291 \\ -164 \\ \hline \end{array}$$

$$\begin{array}{r} 964 \\ -553 \\ \hline \end{array}$$

$$\begin{array}{r} 516 \\ -208 \\ \hline \end{array}$$

$$\begin{array}{r} 187 \\ -69 \\ \hline \end{array}$$

$$\begin{array}{r} 615 \\ -504 \\ \hline \end{array}$$

$$\begin{array}{r} 219 \\ -49 \\ \hline \end{array}$$

$$\begin{array}{r} 848 \\ -159 \\ \hline \end{array}$$

$$\begin{array}{r} 605 \\ -46 \\ \hline \end{array}$$

$$\begin{array}{r} 590 \\ -308 \\ \hline \end{array}$$

$$\begin{array}{r} 369 \\ -210 \\ \hline \end{array}$$

Escola: _____

Data: _____ Turma: _____ EducacaoeTransformacao.com.br

Aluno: _____

$$\begin{array}{r} 641 \\ -137 \\ \hline \end{array}$$

$$\begin{array}{r} 620 \\ -93 \\ \hline \end{array}$$

$$\begin{array}{r} 648 \\ -135 \\ \hline \end{array}$$

$$\begin{array}{r} 513 \\ -85 \\ \hline \end{array}$$

$$\begin{array}{r} 810 \\ -514 \\ \hline \end{array}$$

$$\begin{array}{r} 366 \\ -209 \\ \hline \end{array}$$

$$\begin{array}{r} 851 \\ -140 \\ \hline \end{array}$$

$$\begin{array}{r} 907 \\ -49 \\ \hline \end{array}$$

$$\begin{array}{r} 346 \\ -28 \\ \hline \end{array}$$

$$\begin{array}{r} 806 \\ -382 \\ \hline \end{array}$$

$$\begin{array}{r} 583 \\ -312 \\ \hline \end{array}$$

$$\begin{array}{r} 680 \\ -165 \\ \hline \end{array}$$

$$\begin{array}{r} 704 \\ -29 \\ \hline \end{array}$$

$$\begin{array}{r} 258 \\ -139 \\ \hline \end{array}$$

$$\begin{array}{r} 723 \\ -103 \\ \hline \end{array}$$

$$\begin{array}{r} 440 \\ -86 \\ \hline \end{array}$$

$$\begin{array}{r} 491 \\ -196 \\ \hline \end{array}$$

$$\begin{array}{r} 963 \\ -252 \\ \hline \end{array}$$

$$\begin{array}{r} 136 \\ -107 \\ \hline \end{array}$$

$$\begin{array}{r} 264 \\ -48 \\ \hline \end{array}$$

Escola: _____

Data: _____ Turma: _____ EducacaoeTransformacao.com.br

Aluno: _____

$$\begin{array}{r} 20 \\ -17 \\ \hline \end{array} \quad \begin{array}{r} 96 \\ -38 \\ \hline \end{array} \quad \begin{array}{r} 48 \\ -40 \\ \hline \end{array} \quad \begin{array}{r} 12 \\ -9 \\ \hline \end{array} \quad \begin{array}{r} 67 \\ -51 \\ \hline \end{array}$$

$$\begin{array}{r} 23 \\ -5 \\ \hline \end{array} \quad \begin{array}{r} 34 \\ -24 \\ \hline \end{array} \quad \begin{array}{r} 85 \\ -39 \\ \hline \end{array} \quad \begin{array}{r} 50 \\ -9 \\ \hline \end{array} \quad \begin{array}{r} 62 \\ -45 \\ \hline \end{array}$$

$$\begin{array}{r} 78 \\ -51 \\ \hline \end{array} \quad \begin{array}{r} 77 \\ -29 \\ \hline \end{array} \quad \begin{array}{r} 83 \\ -78 \\ \hline \end{array} \quad \begin{array}{r} 35 \\ -16 \\ \hline \end{array} \quad \begin{array}{r} 51 \\ -10 \\ \hline \end{array}$$

$$\begin{array}{r} 81 \\ -61 \\ \hline \end{array} \quad \begin{array}{r} 72 \\ -71 \\ \hline \end{array} \quad \begin{array}{r} 27 \\ -10 \\ \hline \end{array} \quad \begin{array}{r} 91 \\ -39 \\ \hline \end{array} \quad \begin{array}{r} 46 \\ -46 \\ \hline \end{array}$$

$$\begin{array}{r} 35 \\ -20 \\ \hline \end{array} \quad \begin{array}{r} 64 \\ -55 \\ \hline \end{array} \quad \begin{array}{r} 32 \\ -24 \\ \hline \end{array} \quad \begin{array}{r} 41 \\ -22 \\ \hline \end{array} \quad \begin{array}{r} 53 \\ -40 \\ \hline \end{array}$$

Escola: _____


Data: _____ Turma: _____ EducacaoeTransformacao.com.br

Aluno: _____

SUBTRAÇÃO COM RESERVA


$$\begin{array}{r} 35 \\ -27 \\ \hline \end{array}$$



$$\begin{array}{r} 44 \\ -16 \\ \hline \end{array}$$


$$\begin{array}{r} 82 \\ -15 \\ \hline \end{array}$$


$$\begin{array}{r} 75 \\ -18 \\ \hline \end{array}$$


$$\begin{array}{r} 64 \\ -17 \\ \hline \end{array}$$


$$\begin{array}{r} 44 \\ -36 \\ \hline \end{array}$$


$$\begin{array}{r} 45 \\ -09 \\ \hline \end{array}$$


$$\begin{array}{r} 27 \\ -18 \\ \hline \end{array}$$


$$\begin{array}{r} 23 \\ -15 \\ \hline \end{array}$$


$$\begin{array}{r} 35 \\ -17 \\ \hline \end{array}$$











Fonte: Espaço Fundamental

Escola: _____

Data: _____ Turma: _____ EducacaoeTransformacao.com.br

Aluno: _____

SUBTRAÇÃO COM RESERVA



Fonte: Espaço Fundamental